

## Reading



- Where is the light coming from?
- Why might she be glowing?
- Does she have any special powers?
- Can she control them?
- Does she use them for good or bad?
- Is she the only one?
- What are her thoughts at this moment?

## Mental Maths and fluency

$$3 \times 4 = \text{-----}$$

$$6 \times 3 = \text{-----}$$

$$7 \times 2 = \text{-----}$$

$$15 \div 3 = \text{-----}$$

$$12 \div 3 = \text{-----}$$

## Spelling — focus — er

In these words the /er/ sound is coded 'or'. Which of these words are spelt correctly? Tick or cross in the boxes below.

Word	Spelt correctly?
Werth (the value of something)	
Work (an activity you do)	
Werm (an insect)	
Werst (unpleasant or difficult)	

Can you spell the words below which were spelt incorrectly?

## Maths — Arrays — dividing

$12 \div 4 = 3$ $12 \div 3 = 4$


### History

Can you write a diary as if you were a child working in a factory in the 19<sup>th</sup> century?




### D&T

Can you draw your own cereal bar? Think about the design, the name of your cereal bar and the colours!




### Science

Can you describe each rock? What they look like and where might you find these rocks



### PSHE

Can you write a situation where you had to think about someone else's point of view?



### French

Can you match the name of the animals to their pictures?



un singe

une souris

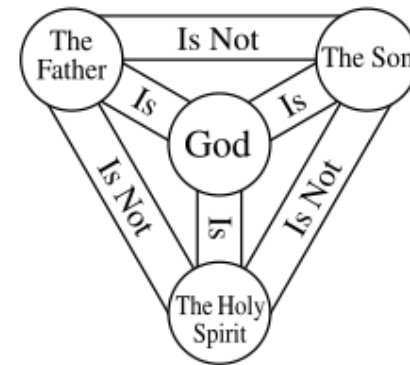
un canard

une vache

un mouton

### RE

Can you draw a picture to represent the Trinity?



Year 3's Home Learning

Homework due back on 18.12.24